








Year 2 Homework—

Below are a variety of maths questions which your child should be able to do.

They may need support to read some of the questions.

1

Can you explain the mistake?

	2D shapes	3D shapes
vertices	 	
no vertices	 	 

2

If today is Monday, what day was it yesterday?

3

Enzo drinks half of the 60ml of juice in his carton. How much is left?

4

$7 \times 10 =$

5

$29 + 37 =$